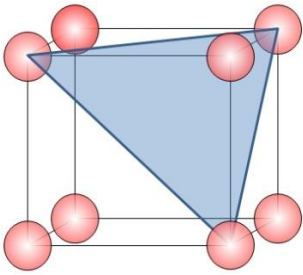
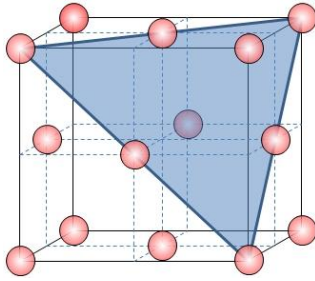
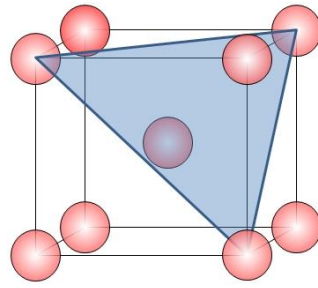


2D Atomic Packing Rankings (III)

Name the crystal structure and plane:







Rank these planes from lowest to highest planar density. Use = and < symbols to indicate the relationship between adjacent planar densities:

Lowest

Highest

Show your work and discuss why these results make sense: